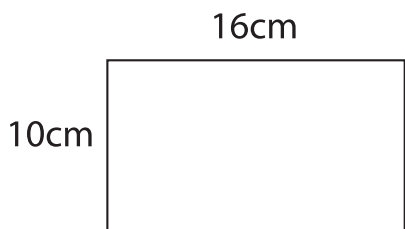


Geometry Worksheet

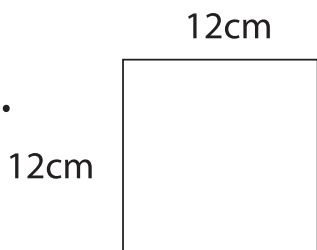
Name _____

1. Find the area.



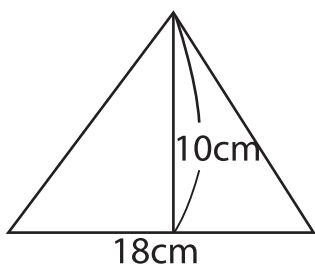
Answer: _____

2.




Answer: _____

3.



Answer: _____

4. Find the perimeter.



$$\overline{AB} = 5\text{m}$$
$$\overline{AC} = 9\text{m}$$

Answer: _____