

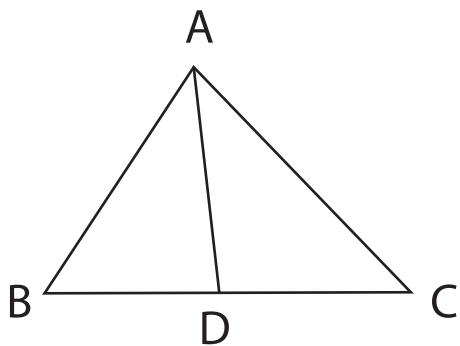
10th Grade Math Worksheet

Name _____

10th grade review.

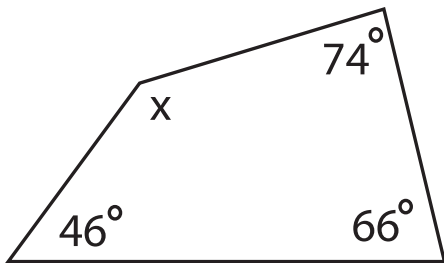
1. Each figure shows a triangle with one or more of its medians.

Find BC if $DC = 5$



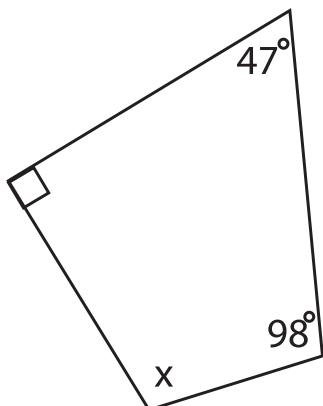
Answer: _____

2. Find the angle of x.



Answer: _____

- 3.



Answer: _____